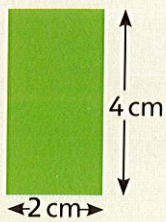


Write the perimeter of each shape in centimetres.
Then write it in metres.


1



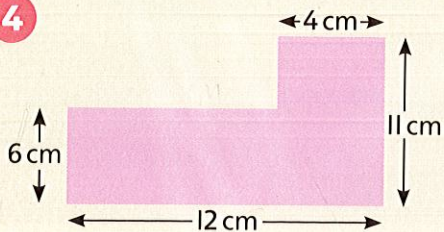
2



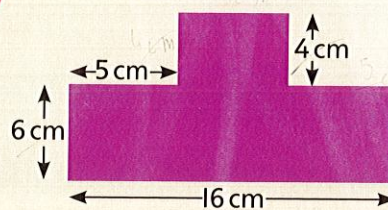
3



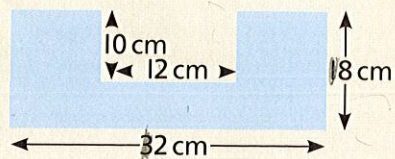
4



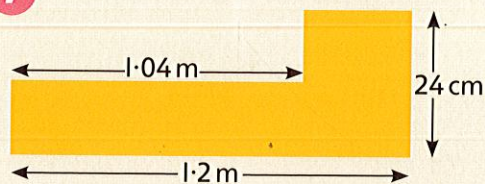
5



6




7

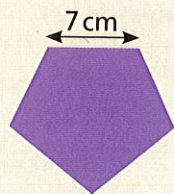


Write the perimeter of these regular polygons
in centimetres and in metres.

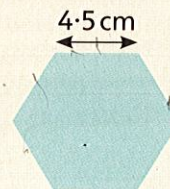
8



9



10



Draw a regular 5-sided polygon
where the perimeter is 27.5 cm.



I am confident with measuring perimeters and
converting centimetres into metres.